

# Hopping to Money

## Money

### Instructions:

Write the value of each group of coins on the lily pads. Then solve the riddle at the bottom of the page by writing the lily pad letters on the lines above the matching answers.




\$1.00



### Helpful Hint:



When counting coins, start with the coin with the greatest value and count on to get the total. Do the same when counting bills.



**Hopping to Money**

Illustration of a frog sitting on a lily pad.



Illustration of a hand writing on a lily pad.

What kind of shoes do frogs wear?

40¢ 95¢ 21¢ 50¢

36¢ 40¢ 56¢ 75¢ 17¢ 32¢ 40¢ 21¢ 17¢

# Hopping to Money



What kind of shoes do frogs wear? \_\_\_\_\_

40¢

95¢

21¢

50¢

36¢

40¢

56¢

75¢

17¢




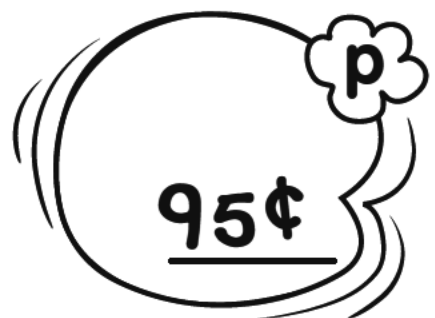
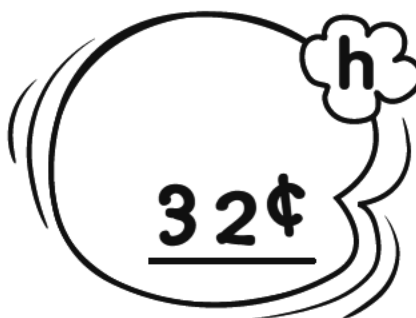
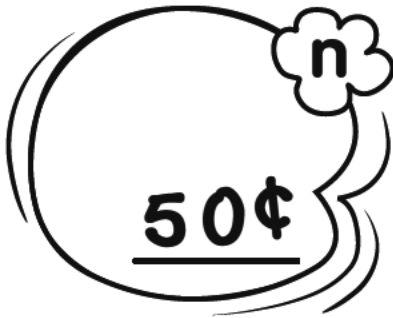

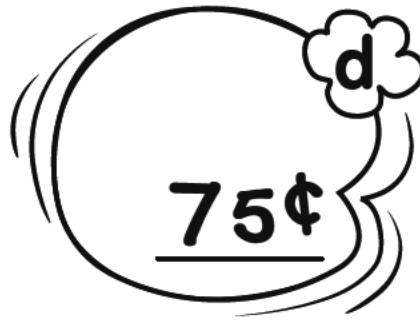
32¢

40¢

21¢

17¢

# Answer Key



What kind of shoes do frogs wear?  $\frac{O}{40c}$   $\frac{P}{95c}$   $\frac{E}{21c}$   $\frac{N}{50c}$  -

$\frac{T}{36c}$   $\frac{O}{40c}$   $\frac{A}{56c}$   $\frac{D}{75c}$   $\frac{S}{17c}$   $\frac{H}{32c}$   $\frac{O}{40c}$   $\frac{E}{21c}$   $\frac{S}{17c}$